


Name _____ Date _____

Types of Tides


Pictures are not to scale.

Name the moon phase for each one.


Using a blue crayon, fill in the tides for each one.



Spring or Neap Tide?




Spring or Neap Tide?



Shade in.



Spring or Neap Tide?



Spring or Neap Tide?



Shade in.